
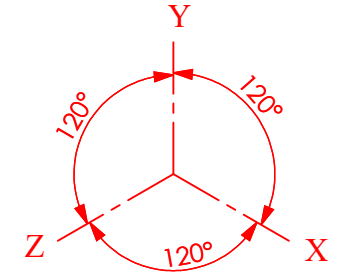
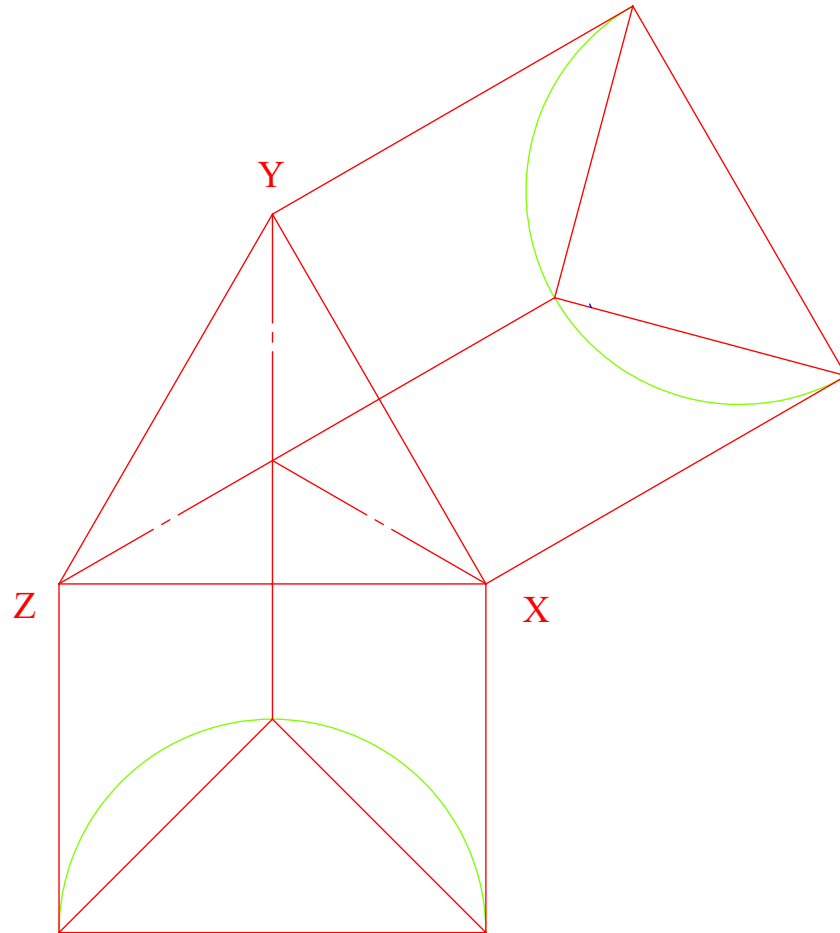


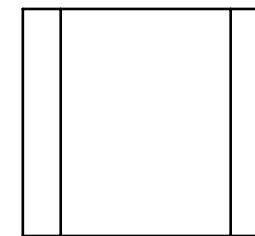


Shown in the photograph is a litter bin, also included is the Elevation and Plan of the litter bin.

Draw the **isometric projection** of the bin having axes inclined as shown.



ELEVATION



PLAN

**SOLIDWORKS Educational Edition.
For Instructional Use Only.**

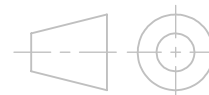


TECHNOLOGY
SUBJECTS
SUPPORT
SERVICE

DESIGN & COMMUNICATION GRAPHICS

TITLE:

WORKSHEET 3



DRAWN BY: YOUR NAME HERE

SIZE
A4

UNLESS OTHERWISE SPECIFIED ALL
DIMENSIONS ARE IN mm

SCALE: 1:2

Date: 11/10/2016

SHEET 1 OF 1